






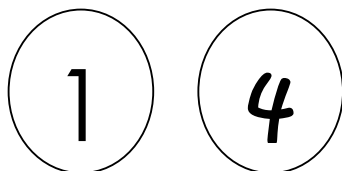
一年级数学评审

(A)根据数量，填写正确的数字和文字。(20%)

	数量	数字	文字
1.			
2.			
3.			
4.			
5.			

(B)把较大的数字涂上黄色。(8%)

1)




3)



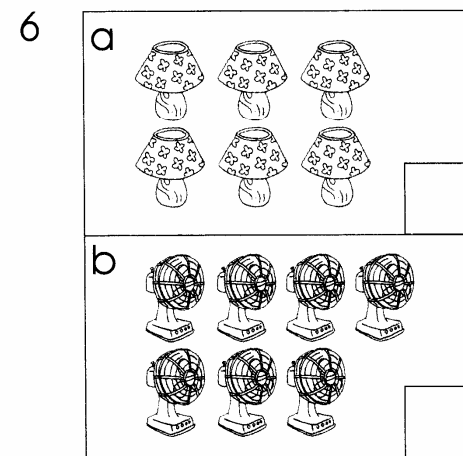
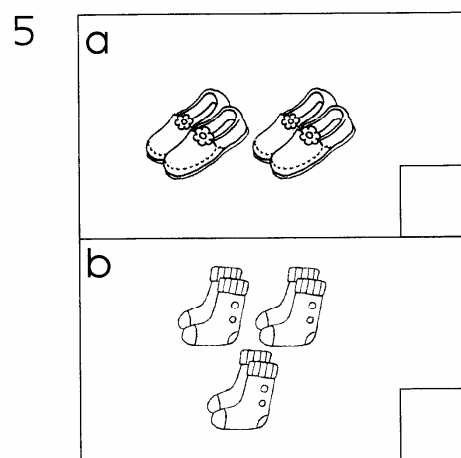
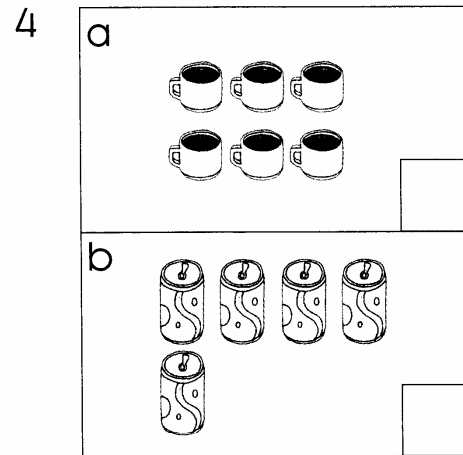
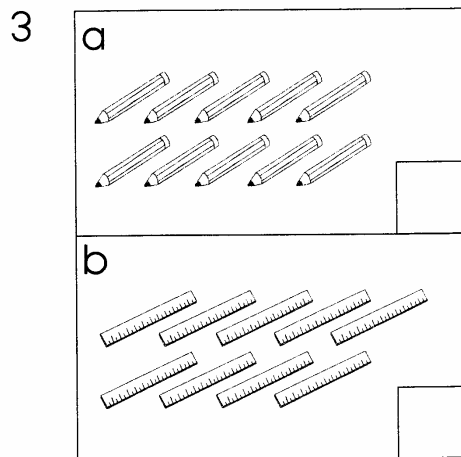
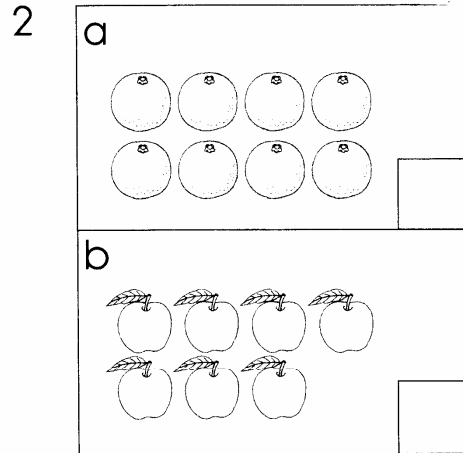
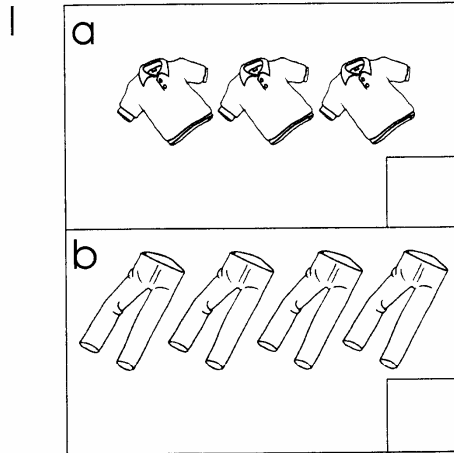
2)



4)

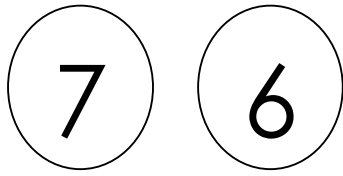


(C)数一数，把数量较多的画 (√)，较少的画 (X)。 (12%)



(D)把较小的数字涂上红色。(8%)

1)



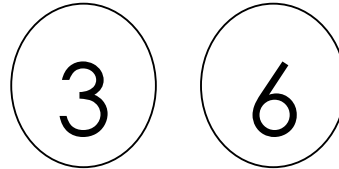
3)



2)

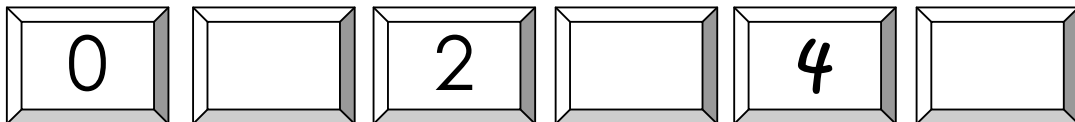


4)

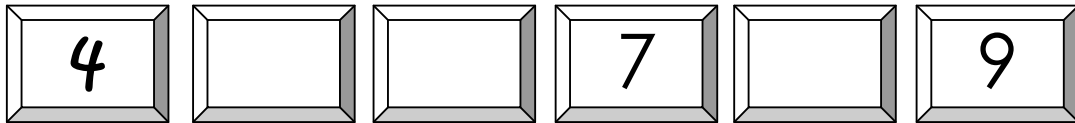


(E)顺序排列下列数字。(6%)

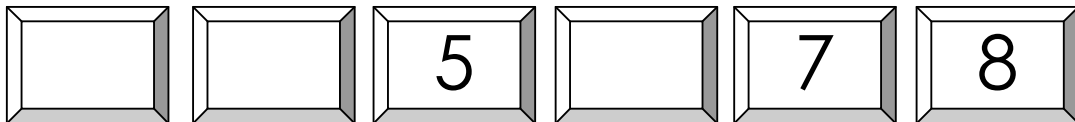
1)



2)

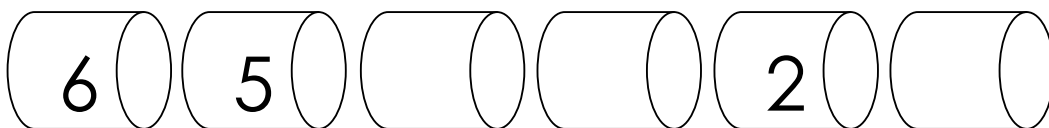


3)

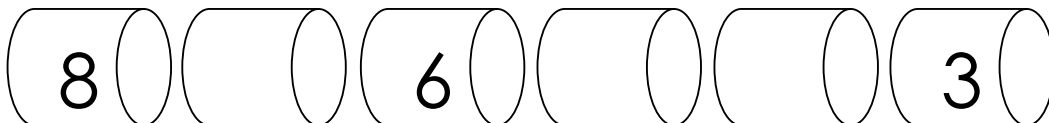


(F)逆序排列下列数字。(6%)

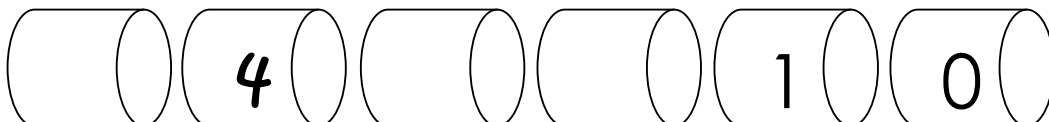
1)



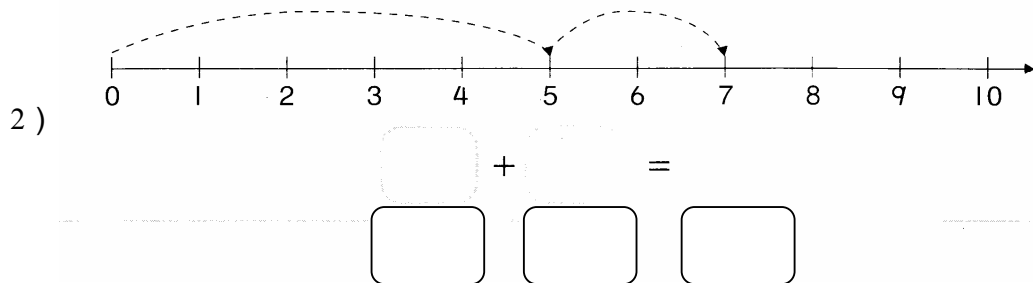
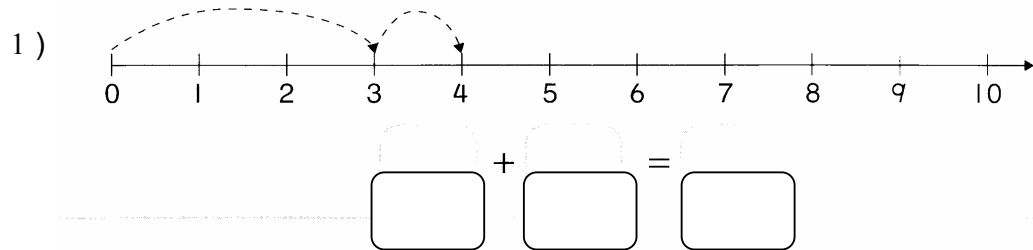
2)



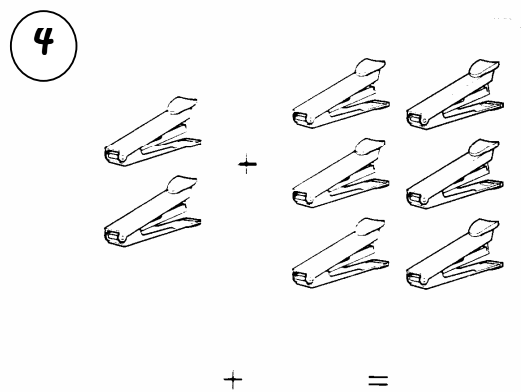
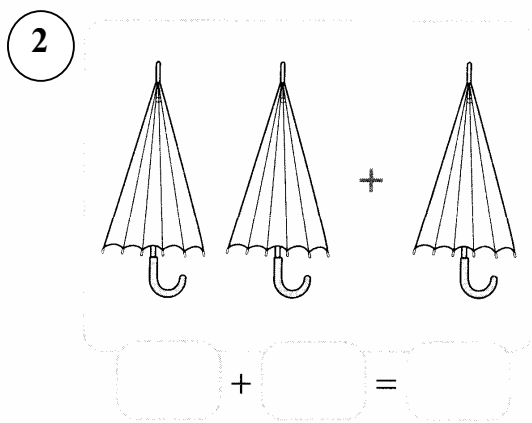
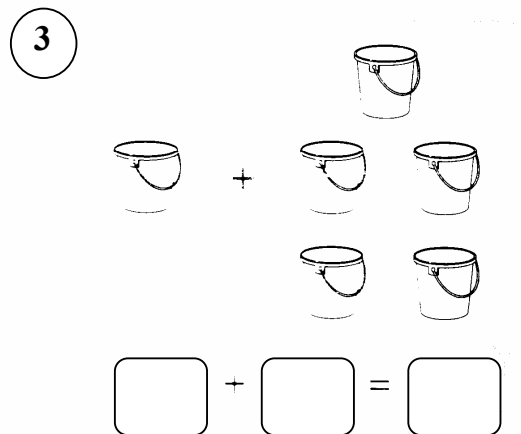
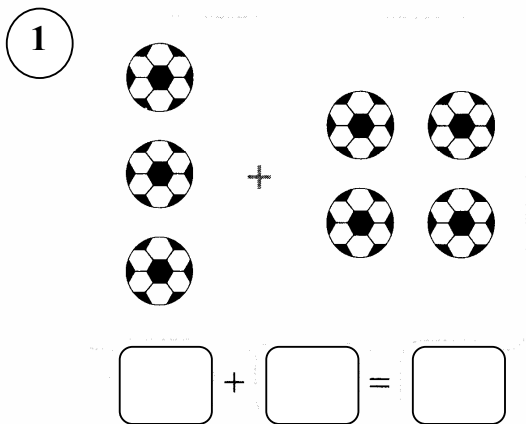
3)



(G)根据数目线，完成加法算式。(4%)



(H)加一加，写一写。(8%)



(I) 完成下列加法算式。(20%)

1) $6 + 1 = \underline{\hspace{2cm}}$

4) $6 + 0 = \underline{\hspace{2cm}}$

2) $7 + 2 = \underline{\hspace{2cm}}$

5) $2 + 5 = \underline{\hspace{2cm}}$

3) $4 + 4 = \underline{\hspace{2cm}}$

6) $\underline{\hspace{2cm}} = 3 + 2$

7)
$$\begin{array}{r} 3 \\ + 5 \\ \hline \end{array}$$

8)
$$\begin{array}{r} 2 \\ + 6 \\ \hline \end{array}$$

9)
$$\begin{array}{r} 9 \\ + 0 \\ \hline \end{array}$$

10)
$$\begin{array}{r} 4 \\ + 3 \\ \hline \end{array}$$

(J) 把正确的答案填入空格里。(8%)

1) 4 比 多 1

2) 比 6 少 1

3) 比 2 多 1

4) 9 比 多 1

一年级数学评审：答案

(A) 1) 2 , 二

2) 6 , 六

3) 7 , 七

4) 10 , 十

5) 4 , 四

(B) 1) 4

2) 8

3) 7

4) 6

(C) 1) (a)X (b)✓

2) (a) ✓ (b)X

3) (a) \checkmark (b)X

4) (a) \checkmark (b)X

5) (a)X (b) \checkmark

6) (a)X (b) \checkmark

(D) 1) 6

2) 5

3) 4

4) 3

(E) 1) 1,3,5

2) 5,6,8

3) 3,4,6

(F) 1) 4,3,1

2) 7,5,4

3) 5,3,2

$$(G) 1) 3 + 1 = 4$$

$$2) 5 + 2 = 7$$

$$(H) 1) 3 + 4 = 7$$

$$2) 2 + 1 = 3$$

$$3) 1 + 5 = 6$$

$$4) 2 + 6 = 8$$

$$(I) 1) 7$$

$$2) 9$$

$$3) 8$$

$$4) 6$$

$$5) 7$$

$$6) 5$$

$$7) 8$$

$$8) 8$$

$$9) 9$$

$$10) 7$$

$$(J) 1) 3$$

$$2) 5$$

$$3) 3$$

$$4) 8$$

